

Name _____


Awesome Rays

Color each circle in column A to show each fraction.

Write a fraction to show the shaded part of each circle in column B.

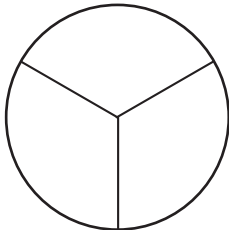
Then match the equivalent fractions in each column.

Draw a line to connect the black dots.



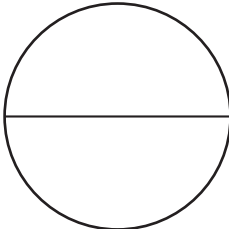
Column A

$$\frac{2}{3}$$



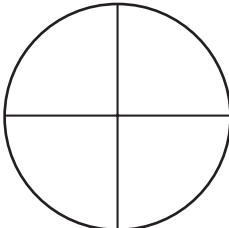
•

$$\frac{1}{2}$$



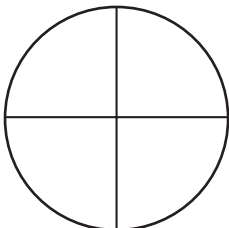
•

$$\frac{1}{4}$$



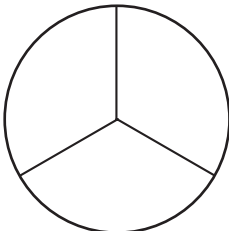
•

$$\frac{3}{4}$$



•

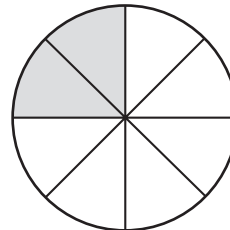
$$\frac{1}{3}$$



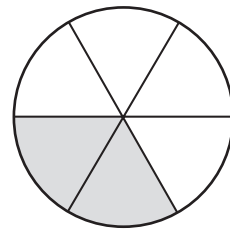
•

Column B

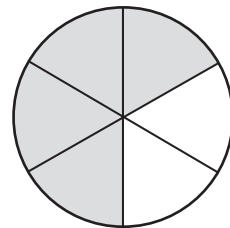
•



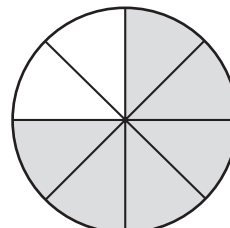
•



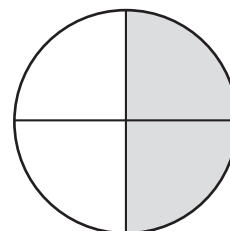
•



•



•



Bonus Box: On the back of this sheet, draw a picture to show what you like to do at the beach.



Answer Key

